

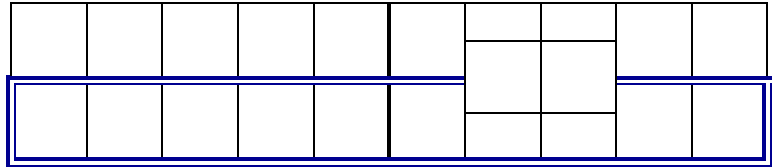


# Ergänzungsaufgaben (1) - Minus bis 10

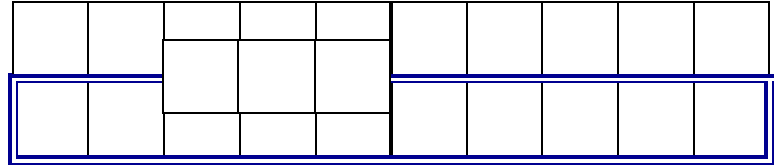
mit Stäbchen legen-malen-rechnen



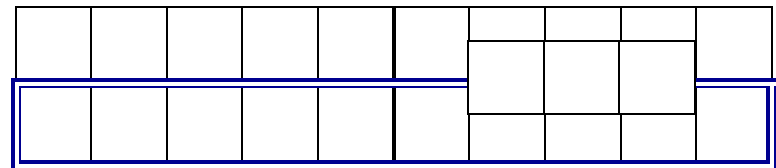
$$6 = 8 - \underline{\quad}$$



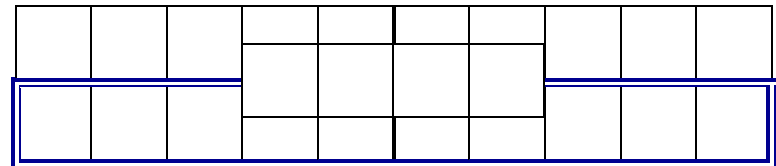
$$2 = 5 - \underline{\quad}$$



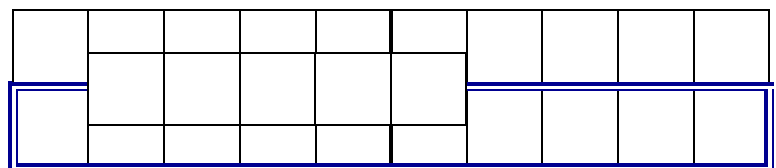
$$6 = 9 - \underline{\quad}$$



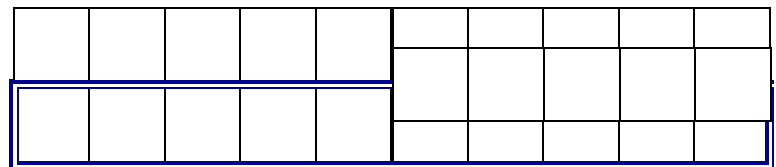
$$3 = 7 - \underline{\quad}$$



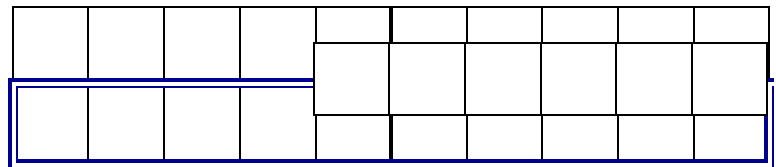
$$1 = 6 - \underline{\quad}$$



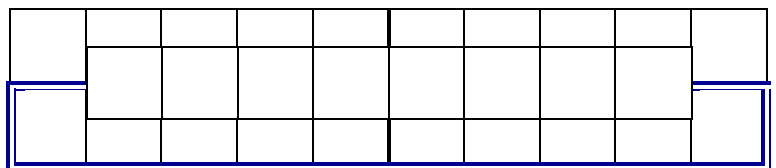
$$5 = 10 - \underline{\quad}$$



$$4 = 10 - \underline{\quad}$$



$$1 = 9 - \underline{\quad}$$



$$2 = 4 - \underline{\quad}$$

